

Name: _____

Date: _____



GENIUSCHALLENGE

EXTERNAL ANIMAL PARTS

Word Box

tail

animal covering

legs


claws

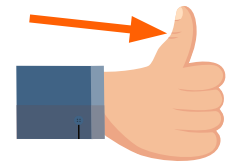
opposable thumb


beak


1-6. Label the pictures with the correct word from the word box.














7. What kind of part is on the outside of an animal?

a. internal

b. external

c. extra

d. inter

8. Animals use their external parts to help them _____.

a. think

b. breathe

c. sleep

d. survive

9. _____ make it easier for us to pick things up and open bottles.

a. opposable thumbs

b. ears

c. tail

d. claws

10. What are 3 different external parts that people have?

a. _____ b. _____ c. _____